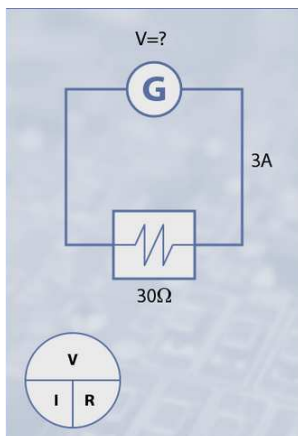


Exercises

Take a look at the following figures and choose correct answer on the questions provided.

Exercise 1: Based on the Ohm's Law concept what voltage is in the circuit?



90 volts



9 volts

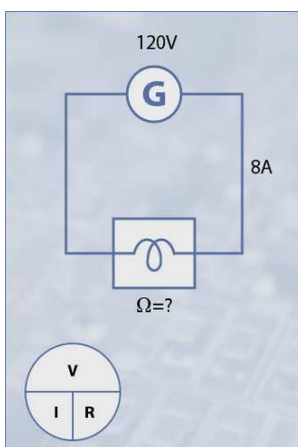


0.1 volts



0.9 volts

Exercise 2: Based on the Ohm's Law concept what resistance is in circuit?



.0666...

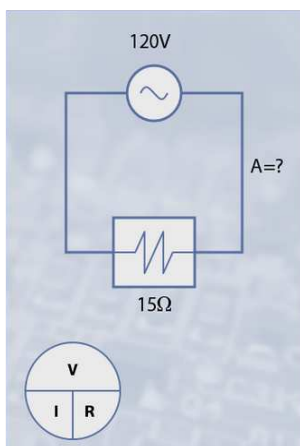


15



960

Exercise 3: Based on the Ohm's Law concept what current is in the circuit?



The circuit has amperes.